


SRI KANCHI MAHASWAMI VIDYA MANDIR

TRANSPORT

CLASS:V







TASK : 1


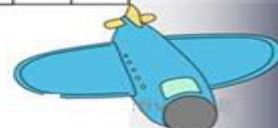
SOLVE THE CROSSWORD PUZZLE



Transportation

1. A 2-wheeled vehicle that a person rides by pushing on foot pedals.
2. A machine that flies through the air.
3. A car that carries passengers to a place for money.
4. A very large airplane that can carry many passengers.
5. A small vehicle that is used for traveling on water.
6. British for truck.
7. A very large and comfortable car usually driven by a professional driver.
8. A vehicle with two wheels that is powered by a motor and that can carry one or two people.
9. A system of tracks on which trains travel.
10. An electric vehicle that runs along the street on tracks.
11. A vehicle that is used for travel in outer space.
12. A child's vehicle that is made of a narrow board with two small wheels attached underneath and an upright handle on top.
13. A boat that is used for catching fish with a large net.
14. A flat structure that is used for floating or sailing on water.
15. A small light vehicle with two wheels that is pulled by one person on foot or on a bicycle and that is used in some Asian countries.
16. A vehicle with four wheels.
17. Small aircraft that consists of a metal frame covered with strong cloth and that is flown through air by a person who hangs beneath it.
18. A light carriage that is usually pulled by one horse.
19. A large vehicle used for carrying many passengers.

SRI KANCHI MAHASWAMI VIDYA MANDIR
TRANSPORT

CLASS:V

TASK : 2

1. A car travels a distance of 720 kms in 4 hours. How much distance will the car travel in 24 minutes?



2. A travelling salesman travelled 75 km, 49 km, 81 km, 36 km and 59 km in the first 5 days of the week. What was the average distance travelled by him?

3. A group of friends want to meet up for a picnic at Deer Point. Shibu is driving the car and he picks up his friends from Arrow Point, Bear Point and Clear Point. Bear Point is 4 km South of Clear Point. Clear Point is 6 km south of Arrow Point. Bear Point is 7 km North of Deer Point.



How far is Arrow Point from Deer Point?

4. A normal train from Chennai to Bangalore takes 6 hours 10 minutes. The shatabdi Express takes 4 hours 45 minutes. How much time do you save by travelling on the shatabdi?

5. Madhur joined a 2- week car driving class that got over on September 3rd. When did it begin?

6. A factory produced 10, 567 cycles in first year, 15,995 cycles in second year and 21,771 cycles in third year. How many total cycles did the factory produce in three years?



7. The consumption of a car is 84.15 litres of petrol in a fortnight. How many litres of petrol is consumed per day?

8. Mr.Neeraj bought a new car for ₹ 8,68,417 and Ms.Manju bought a car for ₹ 5,74,398. What is the difference in the prices of the two cars?



SRI KANCHI MAHASWAMI VIDYA MANDIR
TRANSPORT

CLASS:V

TASK : 5



தலைப்பு: போக்குவரத்து

கீழே கொடுக்கப்பட்டுள்ள படத்தினை உற்று நோக்கி இவ்விடத்தின் பெயர் மற்றும் இது எந்த மாவட்டத்தில் அமைந்துள்ளது என்பதை எழுதுக.



விடுகதையை கேட்போம். விடையை எழுதுவோம்.

காலால் மிதிக்க ஓடிடுவான்.

கையால் பிடிக்க நின்றிடுவான்.



பறவைபோல பறந்திடுவான்.

விரைவில் சென்று சேர்த்திடுவான்.



நீண்ட வண்டிக்காரன்.

நிறைய பெட்டிக்காரன்.



நீலக்கடலில் நீந்திடுவான்.

நீரில் பாய்ந்து சென்றிடுவான்.



SRI KANCHI MAHASWAMI VIDYAMANDIR

TRANSPORT

CLASS: IV

TASK 4

I. उचित उत्तर चनकर रिक्त स्थान भरिए।

(वन, दमकल, रागो वाहन, टाइटनिक जहाज, स्कटर, कार ,बाइसाइकिल)

१. रागिया का इस गाडो म आपत्ति क समय म ल जात ह —————

२. बहत बढिया जहाज, जा एक फिल्म म दिखाइ दिया —————

३. मर पापा इस गाडो म सवार करना पसद करत ह —————

४. ज्यादातर बच्च इसम स्कल आत - जात ह —————

५. बड-बड शहरों म य गाडो दिखाइ दतो ह —————

६. दा पहिया वाली गाडो —————

७. आग बझान वाली गाडो —————

II.



यह चन्न मटा ह। इसम क्या-क्या सविधाए ह? क्या आपन इसम सफर किया ह? उसक बार म लिखिए।